





Use the array provided to solve each problem.


1) $43 \times 30 =$




2) $32 \times 30 =$




3) $20 \times 23 =$




4) $25 \times 20 =$



5) $20 \times 25 =$



6) $22 \times 20 =$



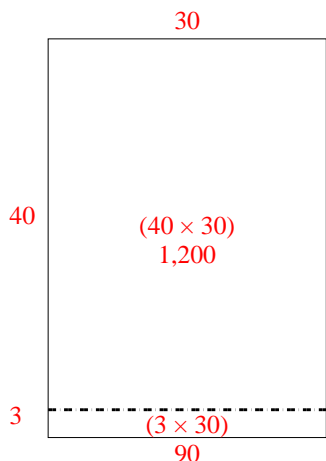
Answers

- 1. _____
- 2. _____
- 3. _____
- 4. _____
- 5. _____
- 6. _____

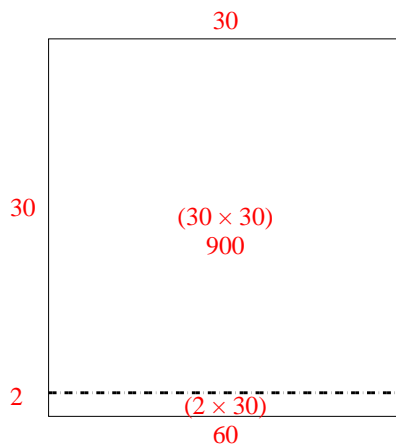


Use the array provided to solve each problem.

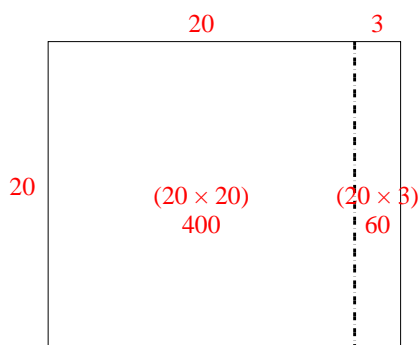
1) $43 \times 30 =$



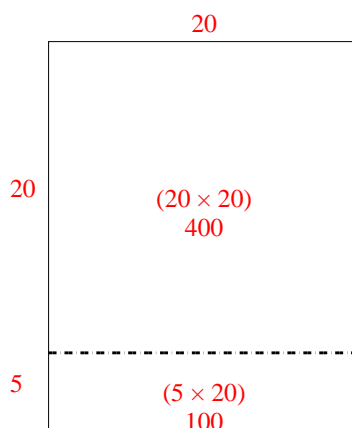
2) $32 \times 30 =$



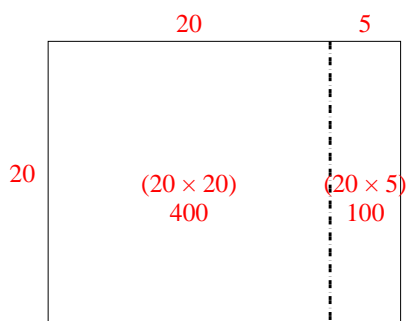
3) $20 \times 23 =$



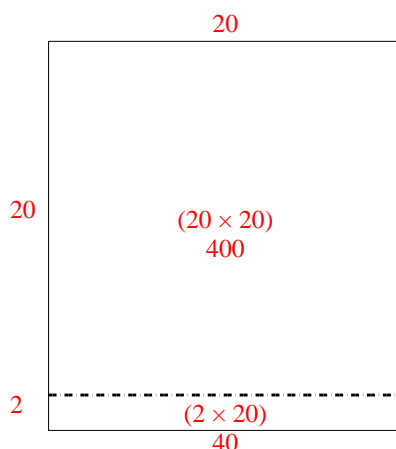
4) $25 \times 20 =$



5) $20 \times 25 =$



6) $22 \times 20 =$



Answers

1. 1,290

2. 960

3. 460

4. 500

5. 500

6. 440